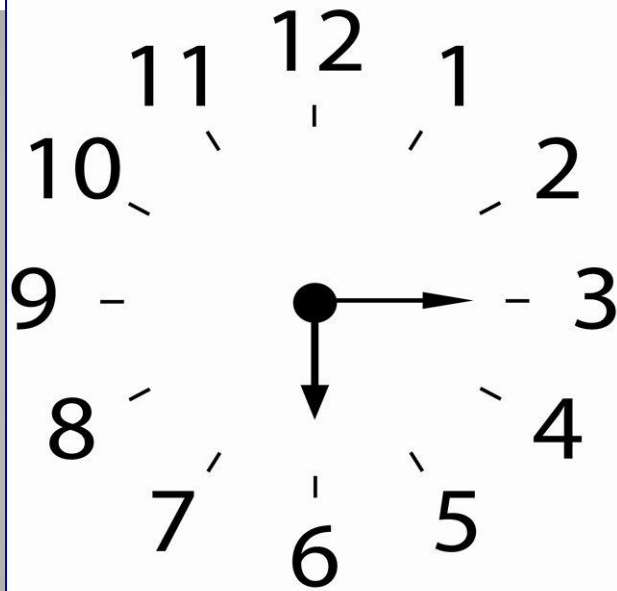


What's the time?






1

a) It's quarter past six.

b) It's three o'clock.



2

- a) It's ten past ten.**
- b) It's ten to ten.**



3

- a) It's five past six.**
- b) It's five to six.**



4

- a) It's twenty-five past twelve.**
- b) It's twenty-five to one.**




5

- a) It's three o'clock.**
- b) It's fifteen o'clock.**



6

- a) It's fifteen past five.**
- b) It's fifteen to six.**



7

- a) It's twenty past two.**
- b) It's twenty to two.**



8

- a) It's twenty past twelve.**
- b) It's twenty to one.**



9

- a) It's half past eight.**
- b) It's half to eight.**



10

- a) It's twenty-five past three.**
- b) It's twenty-five to four.**



Thank you !